


Name: _____ Date: _____

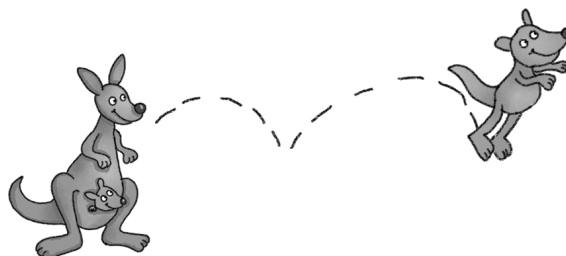
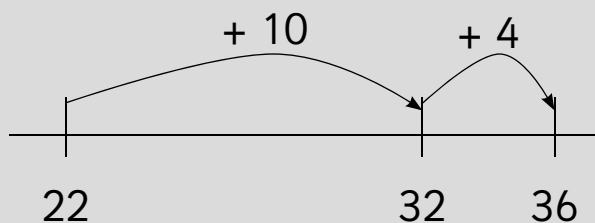
Kangaroo addition



Add two 2-digit numbers

$$14 + 22 = 36$$

14
↙ ↘
10 4



$13 + 35 = \square$

$41 + 27 = \square$

$34 + 52 = \square$

$33 + 64 = \square$

$17 + 29 = \square$

$47 + 25 = \square$

$36 + 58 = \square$

$28 + 66 = \square$

Teacher's notes

Children use the space underneath each question to draw a number line to help them work out the answer.