


Name: _____ Date: _____

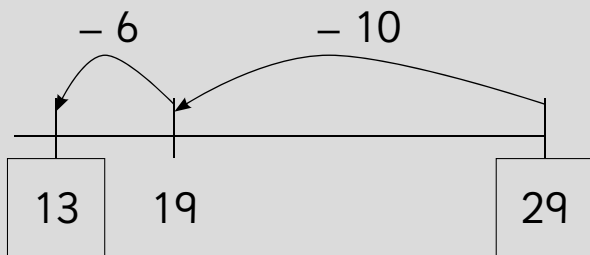
Frog subtraction

Subtract two 2-digit numbers



$$29 - 16 = \square$$

16
10 6



$$37 - 24 = \square$$

24
20 4



$$48 - 17 = \square$$

17
10 7




$$34 - 19 = \square$$

19
10 9




$$42 - 26 = \square$$

26
20 6



$$65 - 38 = \square$$

38
30 8



Teacher's notes

Children use the number line underneath each question to help them work out the answer. For each question the smaller number has been partitioned into tens and ones to assist the children.