



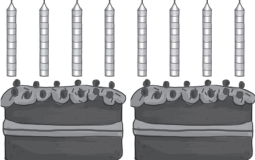


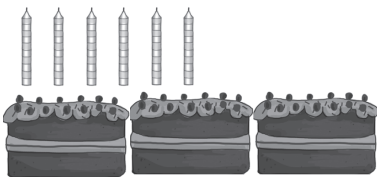
**1** a)   sets of  make  altogether.

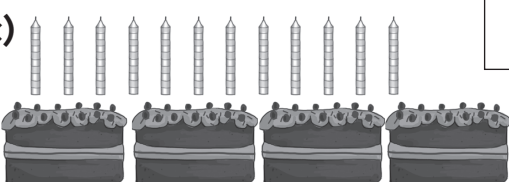
b)   
  sets of  make  altogether.

c)   
  sets of  make  altogether.

**1**  
3 marks

**2** a)   shared between  is .

b)   shared between  is .


c)   shared between  is .

**2**  
3 marks

**3** a) 15 party cakes shared between 5 friends. How many cakes does each friend get?



b) There are 5 party hats in each bag. How many hats are in 4 bags?



c) Each bag has 10 balloons. How many balloons are in 3 bags?



d) 12 children are put into two teams. How many children are in each team?



**3**  
4 marks