

Name: \_\_\_\_\_ Date: \_\_\_\_\_

## Number and place value

Write the missing multiples.

**1** 12, , 24, , , 42, , , 60, ,

1  
1 mark

**2** 9, 18, , , 45, , , 72, , ,

2  
1 mark

**3** 14, 21, , 35, , , 56, , , 77,

3  
1 mark

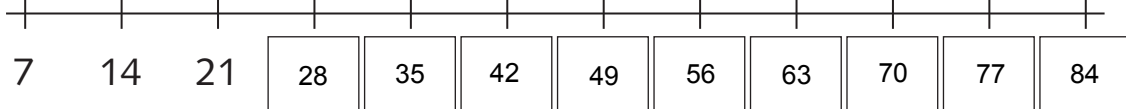
**4** 25, , 75, , , 150, , , , , 275

4  
1 mark

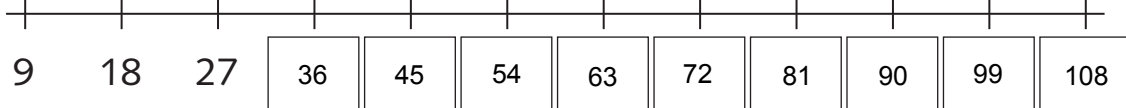
**5** , 2000, 3000, , , , 7000, ,  
, , 11 000

5  
1 mark

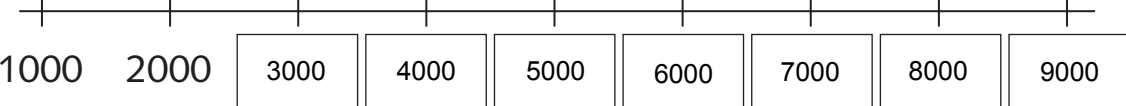
Complete each number line.

**6**  7 14 21

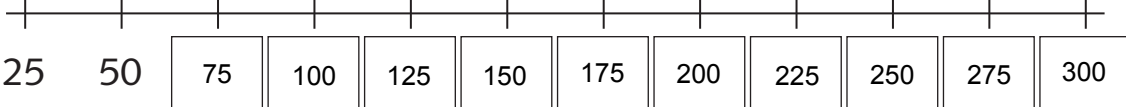
6  
1 mark

**7**  9 18 27

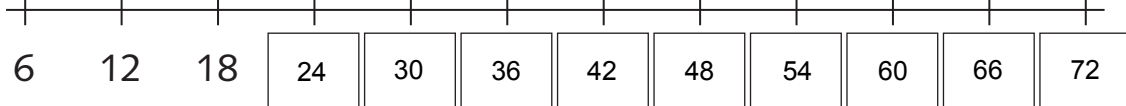
7  
1 mark

**8**  1000 2000

8  
1 mark

**9**  25 50

9  
1 mark

**10**  6 12 18

10  
1 mark