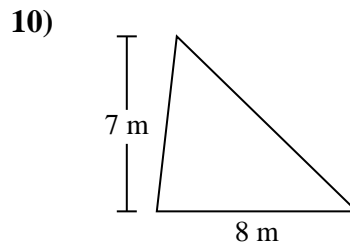
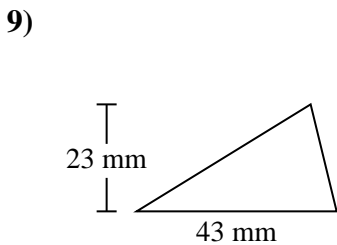
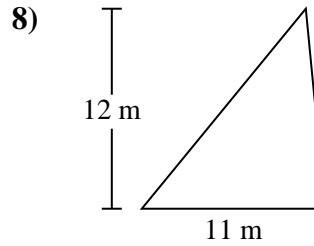
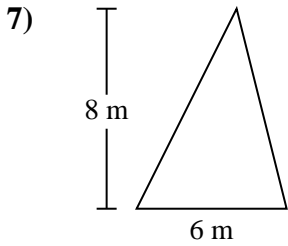
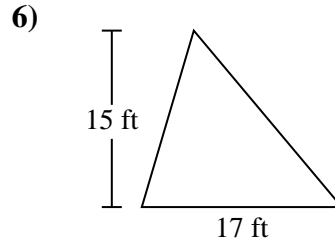
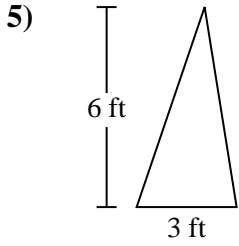
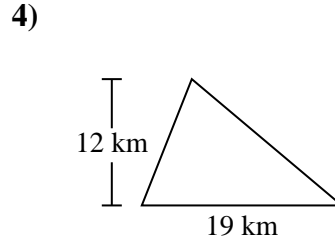
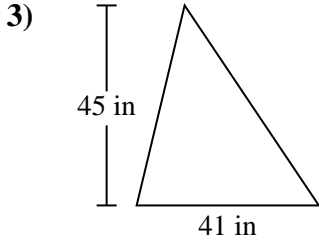
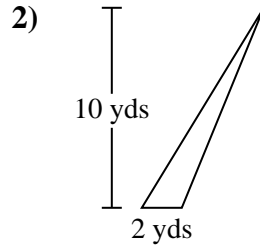
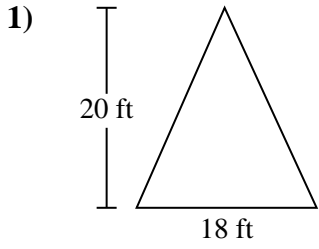




Find the area of each triangle. Units are not to scale.

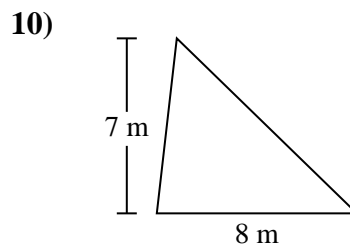
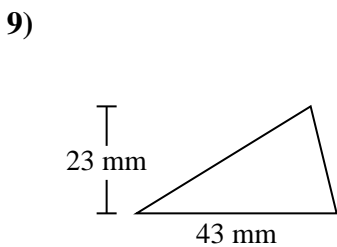
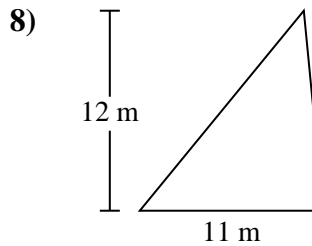
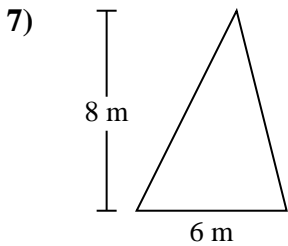
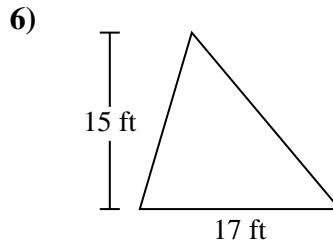
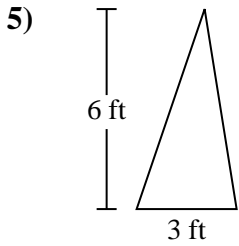
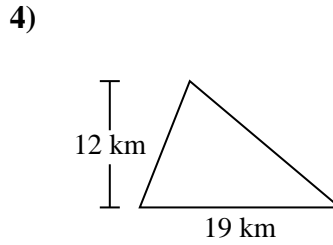
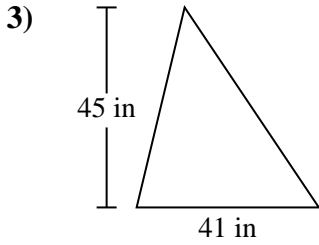
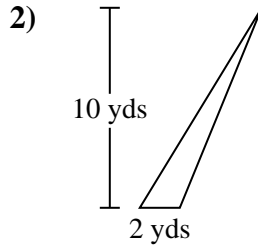
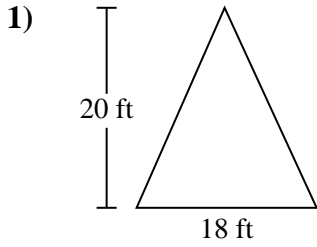


Answers

- 1. _____
- 2. _____
- 3. _____
- 4. _____
- 5. _____
- 6. _____
- 7. _____
- 8. _____
- 9. _____
- 10. _____



Find the area of each triangle. Units are not to scale.



Answers

1. 180 ft²
2. 10 yds²
3. 922.5 in²
4. 114 km²
5. 9 ft²
6. 127.5 ft²
7. 24 m²
8. 66 m²
9. 494.5 mm²
10. 28 m²



Find the area of each triangle. Units are not to scale.

Answers

127.5 ft ²	114 km ²	9 ft ²	180 ft ²
66 m ²	28 m ²	494.5 mm ²	922.5 in ²
24 m ²	10 yds ²		

1. _____
2. _____
3. _____
4. _____
5. _____
6. _____
7. _____
8. _____
9. _____
10. _____

