

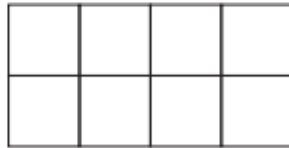

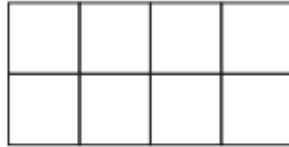
Shade to show half of the whole shape.



Circle half of this group of strawberries.



Shade each whole shape to show half in four different ways.



What is half of this amount?



Four children share a pizza equally. Draw a diagram to show how much pizza each child gets.

What fraction of the pizza does each child eat?

Four children share two bags of 8 marbles equally. Draw a diagram to show how many marbles each child gets.

What fraction of one bag of marbles does each child get?

Complete this halving wall.

What is the relationship between the top row and one part of your final row?

Explain your reasoning.

20			
10			

Choose any number and create your own halving wall.

---