











Find the Answers

Input numbers	Function machine	Function machine	Output numbers
1 2 3 4	 $\times 10$	 $- 3$	7 17 27 37
1 2 4 7	 $+ 9$	 $\times 5$	50 55 65 80
2 8 14 26	 $\div 2$	 $\times 3$	3 12 21 39
6 12 9 3	 $\div 3$	 $+ 8$	10 12 11 9
3 4 5 6	 $\times 7$	 $- 3$	18 25 32 39