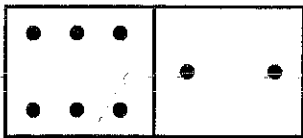


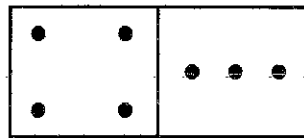
**Sheet 15 ADDITION FACTS 1** 15

Fill in the boxes.

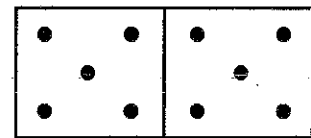
**A**



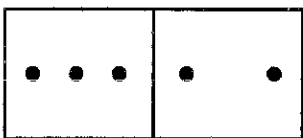
$6 + 2 = 8$



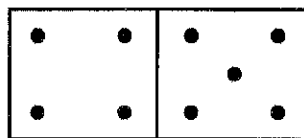
$\square + \square = \square$



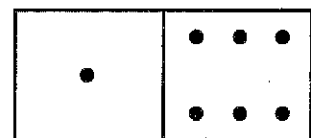
$\square + \square = \square$



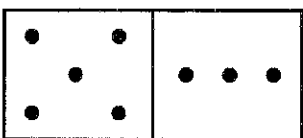
$\square + \square = \square$



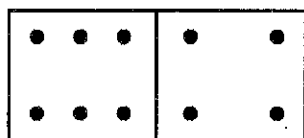
$\square + \square = \square$



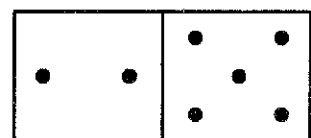
$\square + \square = \square$



$\square + \square = \square$



$\square + \square = \square$



$\square + \square = \square$

**B**

$8 + 5 = 13$

$8 + 8 = \square$

$5 + 9 = \square$

$5 + 7 = \square$

$7 + 9 = \square$

$7 + 4 = \square$

$6 + 6 = \square$

$9 + 9 = \square$

$6 + 7 = \square$

$6 + 5 = \square$

$4 + 8 = \square$

$8 + 6 = \square$

$7 + 3 = \square$

$8 + 7 = \square$

$9 + 6 = \square$

$9 + 8 = \square$

**C**

$16 + 9 = \square$

$18 + 6 = \square$

$15 + 9 = \square$

$17 + 8 = \square$

$15 + 7 = \square$

$14 + 8 = \square$

$19 + 8 = \square$

$16 + 7 = \square$

$13 + 8 = \square$

$17 + 7 = \square$

$17 + 5 = \square$

$18 + 9 = \square$

$19 + 4 = \square$

$16 + 5 = \square$

$18 + 3 = \square$

$19 + 6 = \square$