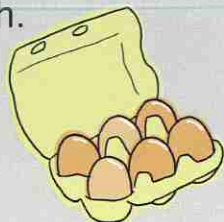


1 Work out the total cost of each purchase. Write your answer in pounds (£).

a 3 boxes of eggs costing £3.89 each.




b 9 boxes of tissues costing £2.29 each.



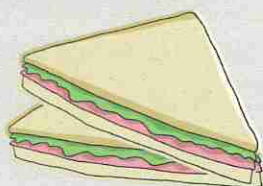
c 6 boxes of chocolates costing £5.68 each.




d 8 pizzas costing £6.89 each.



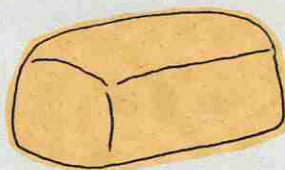
e 6 sandwiches costing £4.50 each.



f 5 pencils costing £1.76 each.



g 7 loaves of bread costing £2.49.



h 7 milkshakes costing £2.44 each.



2 Work out the total cost of each purchase. Write your answer in pounds (£).

a 8 jumpers costing £89.65 each.



b 6 candles costing £25.90 each.



c 4 kettles costing £63.50 each.



d 9 photo frames costing £43.90 each.



e 4 bunches of flowers costing £17.96 each.



f 5 watches costing £84.55 each.



g 3 pairs of trainers costing £95.39 each.



h 5 footballs costing £12.27 each.

