


Date: \_\_\_\_\_

# Bird nest division

Use division facts for the 2 times table



0 1 2 3 4 5 6 7 8 9 10 11 12 13 14 15 16 17 18 19 20 21 22 23 24




10 birds shared between 2 nests:

$$\square \div \square = \square$$




16 birds shared between 2 nests:

$$\square \div \square = \square$$



20 birds shared between 2 nests:

$$\square \div \square = \square$$



14 birds shared between 2 nests:

$$\square \div \square = \square$$



22 birds shared between 2 nests:

$$\square \div \square = \square$$