



## Missing mangoes



Solve addition and subtraction missing number problems




$$11 + \square = 15$$



$$12 - \square = 5$$




$$14 - \square = 8$$



$$3 + \square = 12$$



$$5 + \square = 14$$



$$15 - \square = 7$$



## Teacher's notes

Children use the number track to count on or back to find the missing number in each addition or subtraction calculation.