


Date: _____

Half past

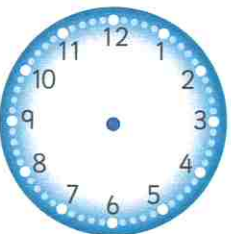
Read and show half-past times



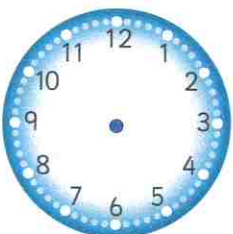
half past 2



half past 3



half past 5



half past 11



half past 8

Teacher's notes

Children write the time underneath each clock face or draw hands on the clock face to show the time given.

