




MISSING NUMBERS


Write in the missing numbers.


$6+5=$ 


$8+6=$ 


$9+4=$ 





$7+$  $=11$


$\text{} + 5 = 12$


$6+$  $=14$


$\text{} + 9 = 17$


$9+9=$ 


$3+9=$ 


$7+$  $=15$


$4+9=$ 


$4+$  $=12$

$2+$  $=11$

$8+$  $=13$

$9+7=$ 

$6+7=$ 

$8+$  $=16$