


Date: \_\_\_\_\_


# halves and quarters questions



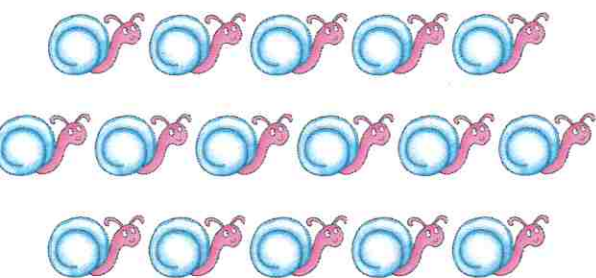
Find one half and one quarter of a set of objects



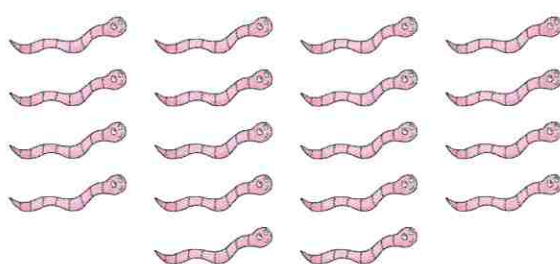
$\frac{1}{2}$  of  is .



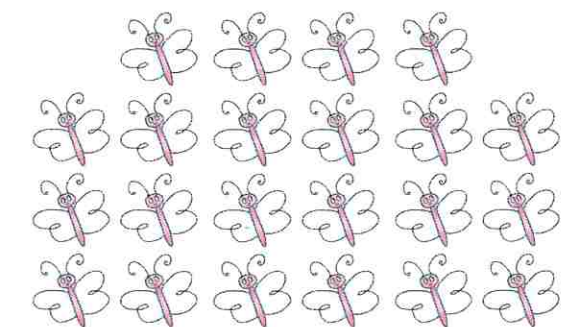
$\frac{1}{4}$  of  is .




$\frac{1}{4}$  of  is .



$\frac{1}{2}$  of  is .



$\frac{1}{2}$  of  is .



$\frac{1}{4}$  of  is .

**Teacher's notes**

Children count the number of minibests in each set, and find one half or one quarter of each set. They then complete the sentence underneath each set.

