

Name:

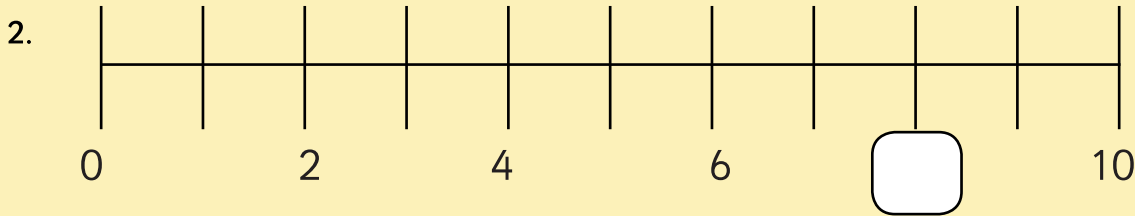
Date:

8
total marks



Maths Quiz - 3

1. 25, 26, 27, 28, ,




3. ← 25 →
 ← 37 →
 ← 49 →

4.


5.

6. kg



7. Sunday, Monday, , Wednesday

8.



1 mark

1 mark

1 mark

1 mark

1 mark

1 mark

1 mark

1 mark

Total for this page

question	answer	marks	notes
1. Complete the following number sequence: 10, 20, 30, 40, _____, _____			
1	50, 60	1	National Curriculum Objective: Count in multiples of twos, fives and tens (Year 1)
2. On your sheet you can see a number line. Which number is missing from the number line? Write it in the box.			
2	8	1	National Curriculum Objective: Identify and represent numbers using objects and pictorial representations including the number line (Year 1)
3. Fill in the missing numbers.			
3	24 - 25 - 26 36 - 37 - 38 48 - 49 - 50	1	National Curriculum Objective: Solve one-step problems that involve addition and subtraction, using concrete objects and pictorial representations (Year 1)
4. Write the number seven in words.			
4	seven	1	National Curriculum Objective: Read and write numbers from 1 to 20 in numerals and words (Year 1)
5. There are 13 apples and 9 bananas in the shop. How many pieces of fruit altogether?			
5	22	1	National Curriculum Objective: Solve one-step problems that involve addition and subtraction, using concrete objects and pictorial representations (Year 1)
6. On your sheet is a set of weighing scales. How much do the apples weigh?			
6	3kg	1	National Curriculum Objective: Begin to record mass / weight (Year 1)
7. Have a look at the days of the week on your sheet. One is missing from this sequence. Which day is missing: Thursday, Saturday or Tuesday?			
7	Tuesday	1	National Curriculum Objective: Recognise and use language relating to dates, including days of the week, weeks, months and years (Year 1)
8. How much money can you count on your sheet?			
8	20p	1	National Curriculum Objective: Recognise and know the value of different denominations of coins and notes (Year 1)
total		8	