



Addition and Subtraction

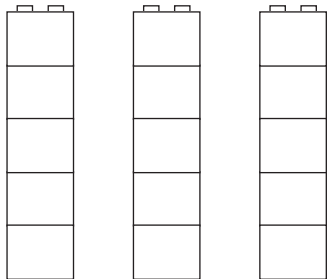
Ready-to-Progress Assessment

Name: _____ Date: _____

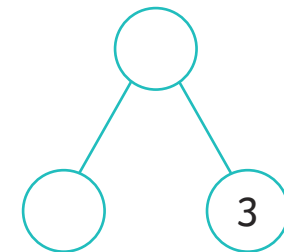
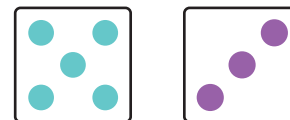
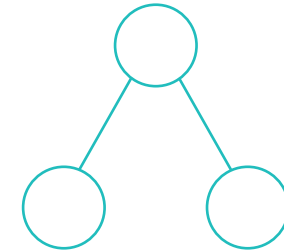
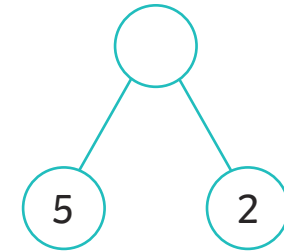
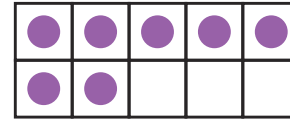
1. Tick the representations that show 8.



2. Ben built three different towers using red and blue bricks. Colour the towers to show what he could have built.



3. Fill in the missing numbers on the part-whole models to match the representations.

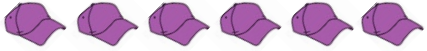
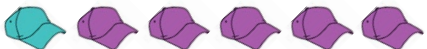







1 mark

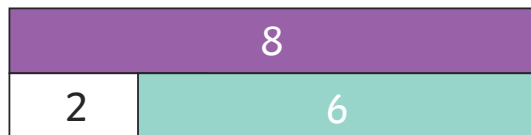
1 mark

2 marks

4. Can you continue this pattern? Use colours to help you.

	Blue	Purple
	0	6
	1	5
	2	4
		
		
		
		

5. Complete number statements to match the bar model.





$2 + 6 = \underline{\quad}$ $\underline{\quad} + \underline{\quad} = \underline{\quad}$

$8 - \underline{\quad} = \underline{\quad}$ $\underline{\quad} - \underline{\quad} = \underline{\quad}$

1 mark

2 marks


6. There are 9 dinosaurs. Some are in the cave. How many are in the cave?



Can you record this as a number statement?

2 marks

7. Draw a line from each number statement to the representation that it matches.
Write a calculation for the one left over.



$3 + 6 = 9$



$1 + 7 = 8$



$9 - 2 = 7$




2 marks

8. 8 children are playing in the puddles. 2 are wearing wellies. How many are not wearing wellies?

1 mark

9. Circle the calculation that matches the story.



$10 - 6 = 4$

$4 + 6 = 10$

$6 + 4 = 10$

$10 - 4 = 6$


1 mark

10. I had some marbles in my pocket. I lost 4 and now I have 2. How many marbles did I have in my pocket?


1 mark

11. Write the numbers in the correct circle.

1 5 8 9 14 2 15




odd



even

1 mark



Total
16 marks