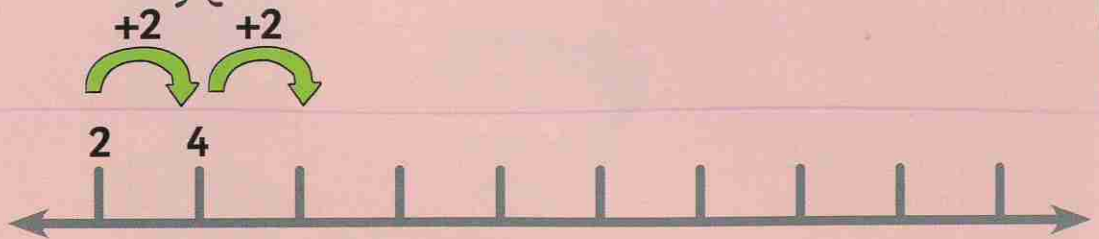


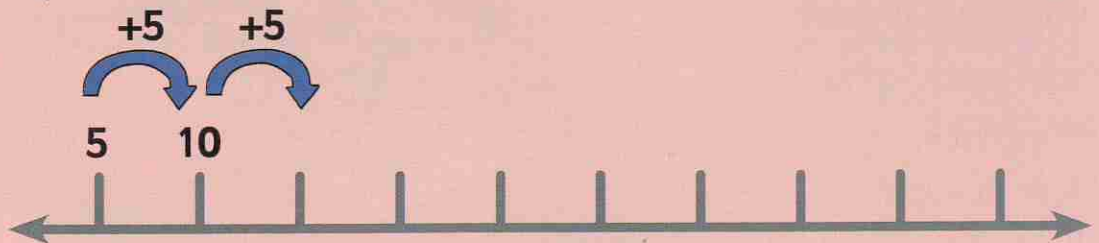


Challenge


Continue to count on in steps of 2.



Continue to count on in steps of 5.



Continue to count on in steps of 10.



Circle the numbers that appear on more than one number line.

What can you say about these numbers?

Think about ...

Look at the numbers on each number line. What patterns do you notice?



Which numbers appear on two number lines? Are there any numbers that appear on all three number lines?



What if?

What if you continue to count on in twos, fives and tens beyond the number lines? Do any numbers appear in more than one list? What patterns do you notice?

When you've finished, turn to page 80.

