






Year 1 Task 1.

WALT: Apply our addition and subtraction knowledge to solve money problems.

Use the information below to answer the questions below.

Cap 8p 	Pencil 7p 	Football 6p 	Water Bottle 3p 	Basketball 5p 
--	---	---	---	---

1. How much money would I need to buy a **pencil** and a **water bottle**?

\_\_\_\_\_ ○ \_\_\_\_\_ =

2. How much money would I need to buy a **football** and a **cap**?

\_\_\_\_\_ ○ \_\_\_\_\_ =

3. I went to the shop with **20p**. I bought a **basketball**. How much money do I have **left**?

\_\_\_\_\_ ○ \_\_\_\_\_ =

4. I went to the shop with **20p**. I bought a **cap**. How much money do I have **left**?

\_\_\_\_\_ ○ \_\_\_\_\_ =

5. I went to the shop with **20p**. I bought a **football** and a **water bottle**. How much do I have **left**?

\_\_\_\_\_ ○ \_\_\_\_\_ ○ \_\_\_\_\_ =

6. I went to the shop with **20p**. I bought a **basketball** and a **pencil**. How much do I have **left**?

\_\_\_\_\_ ○ \_\_\_\_\_ ○ \_\_\_\_\_ =

Challenge

Can you find 4 items (you can have something more than once) that total 20p exactly?

Can you do it more than 1 way?

You need to decide whether you put a + or — in each of the circles.