


There are 36 mums and 15 dads waiting outside school.  
How many parents are outside school altogether?



In Mr Morgan's class there are 17 girls and 15 boys.  
How many children are there in his class?



In assembly, the headteacher gives awards to 29 Key Stage 2 children and 12 Key Stage 1 children. How many children are given an award in total?



At lunchtime, 45 children eat sausages and 27 children eat fish fingers. How many children eat sausages or fish fingers?



The school secretary knows that a notebook costs 16p more than a pencil. A pencil costs 23p. How much does a notebook cost?






At playtime, 38 children are playing in the playground and 53 children are playing in the field. How many children are playing?



There are 27 bicycles and 34 cars in the school car park.  
How many bicycles and cars are there in total?



Miss Green is buying PE equipment. A bag of footballs costs £23 and two football nets cost £39 each. What is the total price that she paid?





There were 18 children in the library. 5 of those children were standing. Another 13 children come to read in the library. How many children are now in the library?



In a cooking lesson, Group 1 makes 24 fairy cakes, Group 2 makes 17 fairy cakes and Group 3 makes 21 biscuits.  
How many fairy cakes were made altogether?



On Tuesday, the park café sold 56 cups of tea and 27 cups of coffee. How many teas and coffees were sold altogether on Tuesday?






The park gardeners have 28 crocus bulbs and 65 daffodil bulbs to plant. How many bulbs do they have to plant in total?





There is space for 45 children at the splash park, but 63 children want to play. How many children have to wait for a space?



The park warden counts 28 goslings and 53 ducklings in the park. How many baby birds did he count in total?



72 people buy tickets for a Family Fun Day in advance.  
Another 19 people buy them on the day. How many  
people buy tickets altogether?





Some children raised money for charity. 36 of them rode their scooters and 25 of them rode their bicycles around the park. How many children raised money for charity in total?





Daisy counted 34 ducks on the pond. 17 of them flew away. How many ducks were left?



The park cafe has seats for 48 people indoors and 35 outdoors. How many seats are there altogether?

