


Name: _____ Date: _____


Addition and subtraction

- 1** There were 12 people on a bus.
At the next bus stop another 5 people got on the bus.
How many people are on the bus now?




1
2 marks

- 2** There are 48 people in a carriage on a train.
30 people are sitting.
How many people are standing?



2
2 marks

- 3** Sanjay buys a drink and a cake.
How much does this cost him?



3
2 marks

- 4** There are 46 children in the school choir and 18 children in the school band. How many children is this altogether?

4
2 marks

- 5** On Monday 75 children came to breakfast club.
On Tuesday there were 18 fewer children than this.
How many children came to breakfast club on Tuesday?

5
2 marks

● solve problems with addition and subtraction: using concrete objects and pictorial representations, including those involving numbers, quantities and measures; applying their increasing knowledge of mental and written numbers

Total: out of 10

Mastery:

NYA

A

A&E