

Name: _____


Date: _____

Measurement

1 Circle the **longer** ribbon.




2 Circle the **taller** child.



1
1 mark

2
1 mark

3 Circle the **lighter** animal.




4 Circle the **heavier** object.




3
1 mark

4
1 mark

5 Circle the jug that holds **more**.




6 Circle the glass that has **less** water in it.




5
1 mark

6
1 mark

7 Circle the animal that moves **faster**.



8 Circle the object that moves **slower**.




7
1 mark

8
1 mark

9 Draw something **heavier** than your shoe.



10 Draw something you did **earlier** today.



9
1 mark

10
1 mark

- compare, describe and solve practical problems for:
 - lengths and heights
 - mass/weight
 - capacity and volume
 - time

Total: out of 10

Mastery:

NYA

A

A&E