










Here are two place value charts showing large numbers, in the millions.








1,000,000	100,000	10,000	1,000	100	10	1
						

Round the number in the place value chart to:

1. the nearest **10,000**

2. the nearest **100,000**

3. the nearest **1,000,000**

1,000,000	100,000	10,000	1,000	100	10	1
						

Round the number in the place value chart to:

4. the nearest **10,000**

5. the nearest **100,000**

6. the nearest **1,000,000**

7. Write 4 numbers that round to 1,300,000 when rounded to the nearest one hundred thousand.

.....

8. Write 4 numbers that round to 1,450,000 when rounded to the nearest ten thousand.

.....



Here are two place value charts showing large numbers, in the millions.

1,000,000	100,000	10,000	1,000	100	10	1
★ ★	★ ★ ★ ★ ★ ★	★ ★ ★ ★ ★ ★	★ ★ ★ ★ ★ ★	★ ★ ★ ★ ★ ★	★ ★ ★ ★ ★ ★	★ ★ ★ ★ ★ ★

Round the number in the place value chart to:

- the nearest **10,000**
- the nearest **100,000**
- the nearest **1,000,000**

1,000,000	100,000	10,000	1,000	100	10	1
★ ★ ★ ★		★ ★ ★ ★ ★ ★	★ ★ ★ ★ ★ ★	★ ★	★ ★ ★ ★ ★ ★	★ ★ ★ ★ ★ ★

Round the number in the place value chart to:

- the nearest **10,000**
- the nearest **100,000**
- the nearest **1,000,000**

7. Write 4 numbers that round to 2,000,000 when rounded to the nearest one hundred thousand.

.....

8. Write 4 numbers that round to 1,050,000 when rounded to the nearest ten thousand.

.....

Name: _____