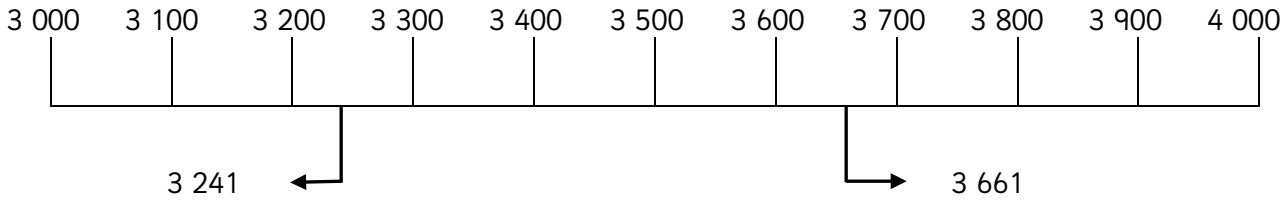




Rounding numbers to the nearest 100



3 241 rounded to the nearest 100 is 3 200

3 661 rounded to the nearest 100 is 3 700.

When rounding to the nearest 100 the key figure is the tens digit.

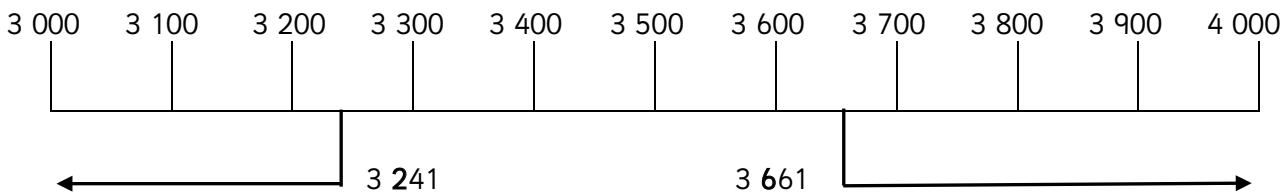
If the tens digit is 5 or above, round up.

If it is below 5 round down.

e.g. $\underline{2}79$ is 300 to the nearest 100 $\underline{2}49$ is 200 to the nearest 100

(Note that it does not matter what the units digit is, it is the TENS digit that must be looked at.)

Rounding numbers to the nearest 1 000



When rounding to the nearest 1 000 the key figure is the hundreds digit. If the hundreds digit is 5 or above, round up. If it is below 5, round down.

e.g. $3 \underline{2}41$ is 3 000 to the nearest 1 000.

$3 \underline{6}61$ is 4 000 to the nearest 1 000

(Note that it does not matter what the tens or units digits are, it is the HUNDREDS digit which must be looked at.)

Make sure, when rounding, that children do not write:

$2 \underline{3}45 = 2 \underline{3}00$ because 2 345 does not equal 2 300.

Round to the nearest 100 and 1000

Maths worksheets from urbrainy.com



3 000 3 100 3 200 3 300 3 400 3 500 3 600 3 700 3 800 3 900 4 000




3 241

3 663

3 241 rounded to the nearest 100 is 3 200

3663 rounded to the nearest 100 is 3 700.

Round these numbers to the nearest 100.
Remember: If the tens digit is 5 or above,
round up.



1. 3 240 2. 5 698 3. 2 555

4. 1 635 5. 2 009 6. 6 590

7. 7 402 8. 12 356 9. 654

10. 9 899 11. 24 609 12. 14 134

13. 8 500 14. 17 499 15. 22 320

16. What is the nearest hundred to 44 444?

17. What is the nearest hundred to 59 987?

18. What is the nearest hundred to 42 123?

19. What is the nearest hundred to 25 409?

20. What is the nearest hundred to 99 499?

Name: _____