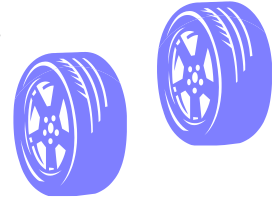


I need to buy 2 new wheels for my car. They cost 4p each.


How much will I need to pay altogether? _____



A mum and her baby went on the bus. If mum's ticket cost 7p and the baby's ticket cost 3p, how much did it cost altogether? _____

John had 14p. He bought a toy plane for 5p.

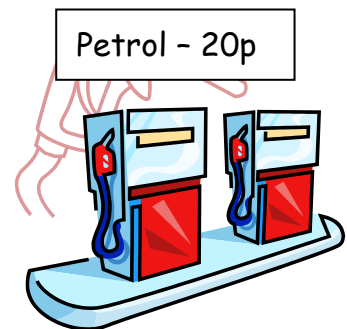
How much money does he have left? _____



A family of 5 get on the train. The tickets cost 10p each.

How much do they pay altogether? _____

Mary had to put petrol in her car. It cost 20p but Mary only had 15p in her purse. How much more money does Mary need? _____



A bike costs 12p and helmet costs 7p. What is the total cost of the bike and the helmet? _____

